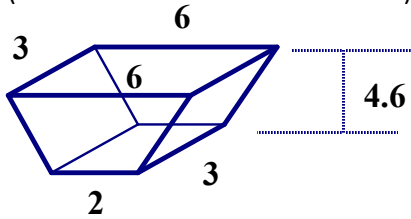
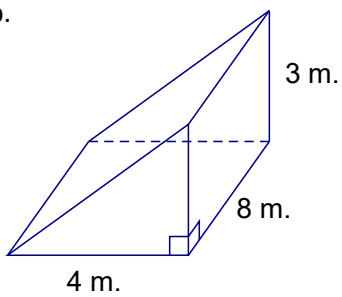


1. Draw out the base of each prism or prism-like solid, and find its area. Use the area of the base to find the volume of the prism. Assume that each is a right prism.

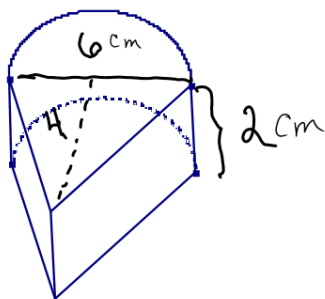
a. (assume measurements in inches)



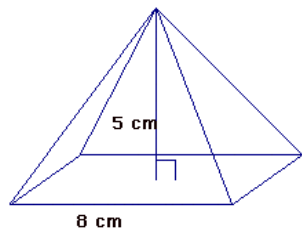
b.



c.



2. Find and draw in the slant height. Find the volume



3. Find and draw in the height. Find the volume

